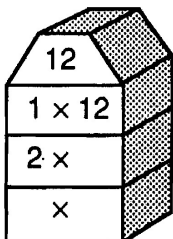
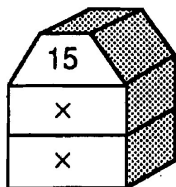


Factor Towers

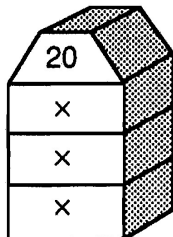
Write a pair of factors in each "story" of the factor tower. Then count the number of different factors and write this number in the blank.



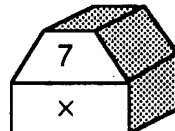
Number of factors _____



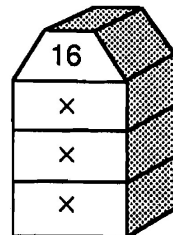
Number of factors _____



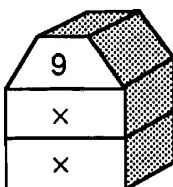
Number of factors _____



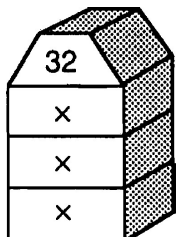
Number of factors _____



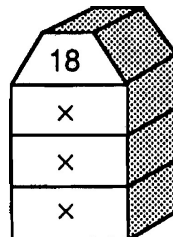
Number of factors _____



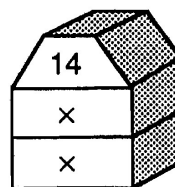
Number of factors _____



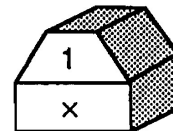
Number of factors _____



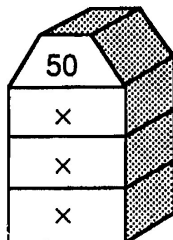
Number of factors _____



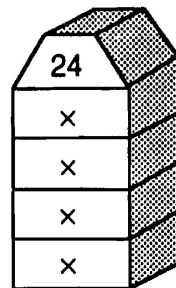
Number of factors _____



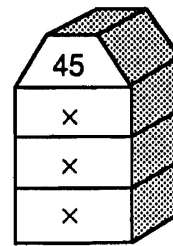
Number of factors _____



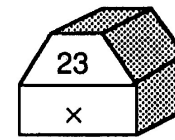
Number of factors _____



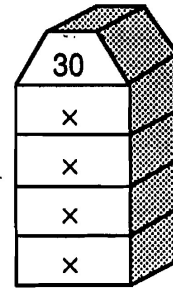
Number of factors _____



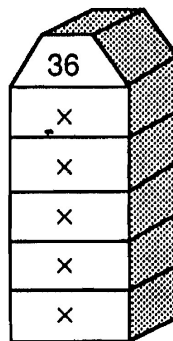
Number of factors _____



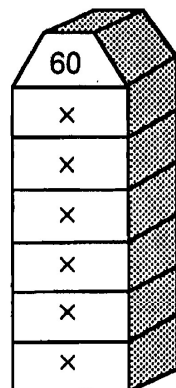
Number of factors _____



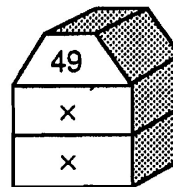
Number of factors _____



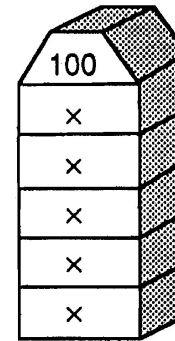
Number of factors _____



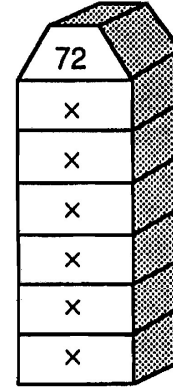
Number of factors _____



Number of factors _____



Number of factors _____



Number of factors _____

What Do You Call It When a Bunch of Kids Throw Crayons and Poster Paint at You?

For each exercise, find the two factors that are missing and write them in the blanks. Cross out the box containing your answer. When you finish, write the letters from the remaining boxes in the spaces at the bottom of the page.

- | | |
|---|---|
| ① Factors of 8:
{1, 4, __, __} | ⑧ Factors of 21:
{1, 3, __, __} |
| ② Factors of 20:
{1, 2, 5, 20, __, __} | ⑨ Factors of 36:
{1, 2, 3, 4, 9, 12, 36, __, __} |
| ③ Factors of 15:
{1, 5, __, __} | ⑩ Factors of 13:
{__, __} |
| ④ Factors of 28:
{1, 2, 7, 28, __, __} | ⑪ Factors of 60:
{1, 2, 3, 4, 5, 6, 10, 15, 30, 60, __, __} |
| ⑤ Factors of 40:
{1, 2, 4, 5, 10, 40, __, __} | ⑫ Factors of 18:
{1, 2, 6, 18, __, __} |
| ⑥ Factors of 66:
{1, 2, 3, 6, 22, 66, __, __} | ⑬ Factors of 45:
{1, 3, 5, 45, __, __} |
| ⑦ Factors of 100:
{1, 2, 4, 10, 20, 50, 100, __, __} | ⑭ Factors of 96:
{1, 2, 3, 4, 6, 12, 16, 24, 48, 96, __, __} |

IT 7,21	TH 11,33	AN 9,12	IS 4,14	EW 6,18	A 4,8	IM 8,32	HU 2,8	SO 12,20	RT 8,15
BR 9,15	AT 3,12	ME 1,13	S 4,10	TA 6,15	ND 5,25	UP 3,15	LU 3,9	CK 12,18	Y 8,20