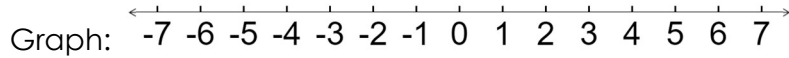


Write the inequality AND graph for each problem below in 7 - 10

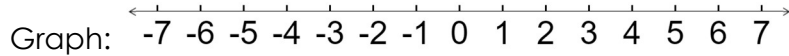
7) Fetty Wap has **at least 3 fans** in Mrs. Ledesma's 3rd period math class.

Inequality: _____



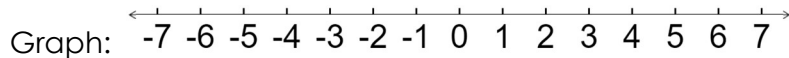
8) Mr. Shaw should send Mrs. Shaw **more than 6 roses per day**.

Inequality: _____



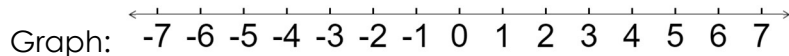
9) Shawn snuck into a G Rated movie because he thought you had to be **at most 7 years old**.

Inequality: _____



10) When trick or treating, Daniella's dream came true. A lady told her she could take **no less than 5 pieces of candy**.

Inequality: _____



More Practice with Inequalities

Write an inequality for each situation, and graph on a number line.

1) Students must score at least 800 to pass the CRCT.



2) You must be shorter than 48" to ride the kiddie train.



3) You should brush your teeth at least twice a day.



4) A good credit score is higher than 699.



5) Classes can have no more than 34 students.



6) AJ needs to save more than \$500.



7) A book costs less than \$20

