







Name _____

BETTER BUY TACO TUESDAY







It's Taco Tuesday, and you want to make sure you get the best deal on your taco ingredients! Find the unit price for each item at each store. Round to the nearest cent if necessary. Once you have found both unit prices, determine which is the better buy based on the unit price. Show all of your work below, and don't forget labels!

Item	Store A		Store B		Which is the better buy?
Taco Shells 	Price	\$1.59 for 12 shells	Price	\$2.99 for 20 shells	
	Unit Price		Unit Price		
Taco Meat 	Price	\$5.36 for 20 oz.	Price	\$9.27 for 48 oz.	
	Unit Price		Unit Price		
Avocados 	Price	\$3.79 for 4 avocados	Price	\$4.98 for 6 avocados	
	Unit Price		Unit Price		
Taco Sauce 	Price	\$1.39 for 10 oz.	Price	\$3.84 for 24 oz.	
	Unit Price		Unit Price		
Cheese 	Price	\$1.60 for 8 oz.	Price	\$6.79 for 32 oz.	
	Unit Price		Unit Price		
Tomatoes 	Price	\$1.99 for 3 tomatoes	Price	\$3.10 for 5 tomatoes	
	Unit Price		Unit Price		

If you only had time to go to one store, which one would you go to and why?

BETTER BUY TACO TUESDAY

It's Taco Tuesday, and you want to make sure you get the best deal on your taco ingredients! Find the unit price for each item at each store. Round to the nearest cent if necessary. Once you have found both unit prices, determine which is the better buy based on the unit price. Show all of your work below, and don't forget labels!

Item	Store A		Store B		Which is the better buy?
Taco Shells 	Price	\$1.59 for 12 shells	Price	\$2.99 for 20 shells	A
	Unit Price	\$0.13 per shell	Unit Price	\$0.15 per shell	
Taco Meat 	Price	\$5.36 for 20 oz.	Price	\$9.27 for 48 oz.	B
	Unit Price	\$0.27 per oz.	Unit Price	\$0.19 per oz.	
Avocados 	Price	\$3.79 for 4 avocados	Price	\$4.98 for 6 avocados	B
	Unit Price	\$0.95 per avocado	Unit Price	\$0.83 per avocado	
Taco Sauce 	Price	\$1.39 for 10 oz.	Price	\$3.84 for 24 oz.	A
	Unit Price	\$0.14 per oz.	Unit Price	\$0.16 per oz.	
Cheese 	Price	\$1.60 for 8 oz.	Price	\$6.79 for 32 oz.	A
	Unit Price	\$0.20 per oz.	Unit Price	\$0.21 per oz.	
Tomatoes 	Price	\$1.99 for 3 tomatoes	Price	\$3.10 for 5 tomatoes	B
	Unit Price	\$0.66 per tomato	Unit Price	\$0.62 per tomato	

If you only had time to go to one store, which one would you go to and why?

Answers will vary.