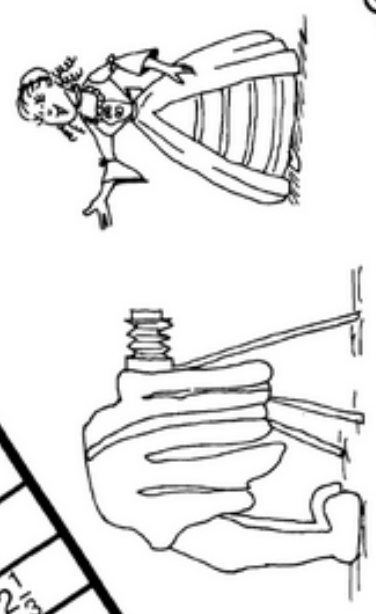


**What did
CINDERELLA
Say to the photographer?**

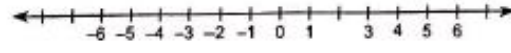
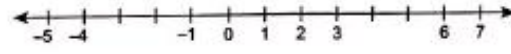
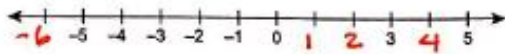
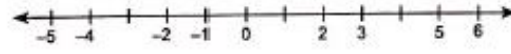
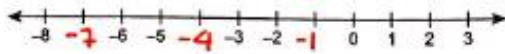
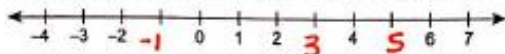
TO ANSWER THIS QUESTION, FOLLOW THESE DIRECTIONS:
 Find the correct point for any of these numbers. Then write the
 corresponding letter at that point above the number.
 KEEP WORKING AND SEE WHAT DEVELOPS!



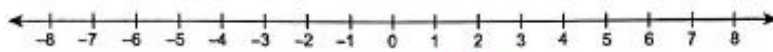
GRAPHING INTEGERS ON A NUMBER LINE

SKILLS

Write in the missing integers of the number line.



List the integers by referring to the number line.



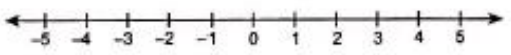
The integers between 0 and 4 are positive. The integers between -1 and -4 are _____.

The integers between 3 and 6 are positive. The integers between -2 and -5 are _____.

The integers between -5 and -8 are negative. The integers between 5 and 8 are _____.

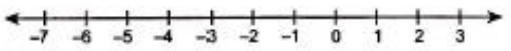
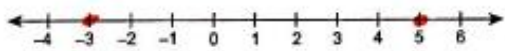
The integers between -3 and -7 are negative.

Graph the integers.



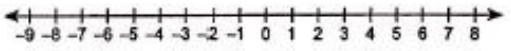
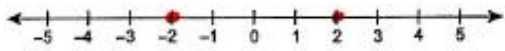
Graph -1 and 3.

Graph 1 and 4.



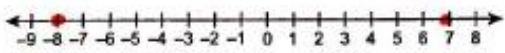
Graph -3 and 5.

Graph -6 and -2.



Graph -2 and 2.

Graph -7 and 6.



Graph -8 and 7.

PROBLEM SOLVING

Graph each described integer on the number line. What word is spelled?

E: 20 feet above sea level

A: A loss of 2 dollars

T: A profit of 8 dollars

T: Grew 4 inches

L: Deposit 15 dollars

E: 8° below zero

S: 14 feet below sea level



When read from left to right, the letters spell the word "SEATTLE."

This Extra Practice worksheet supplements Larson's Prealgebra, a multimedia mathematics program for middle school by Meridian Creative Group. Learn more about Meridian's math tutorial programs, workbooks, and staff development workshops at www.meridiancg.com.

Copyright © Meridian Creative Group. All rights reserved.

INTEGERS