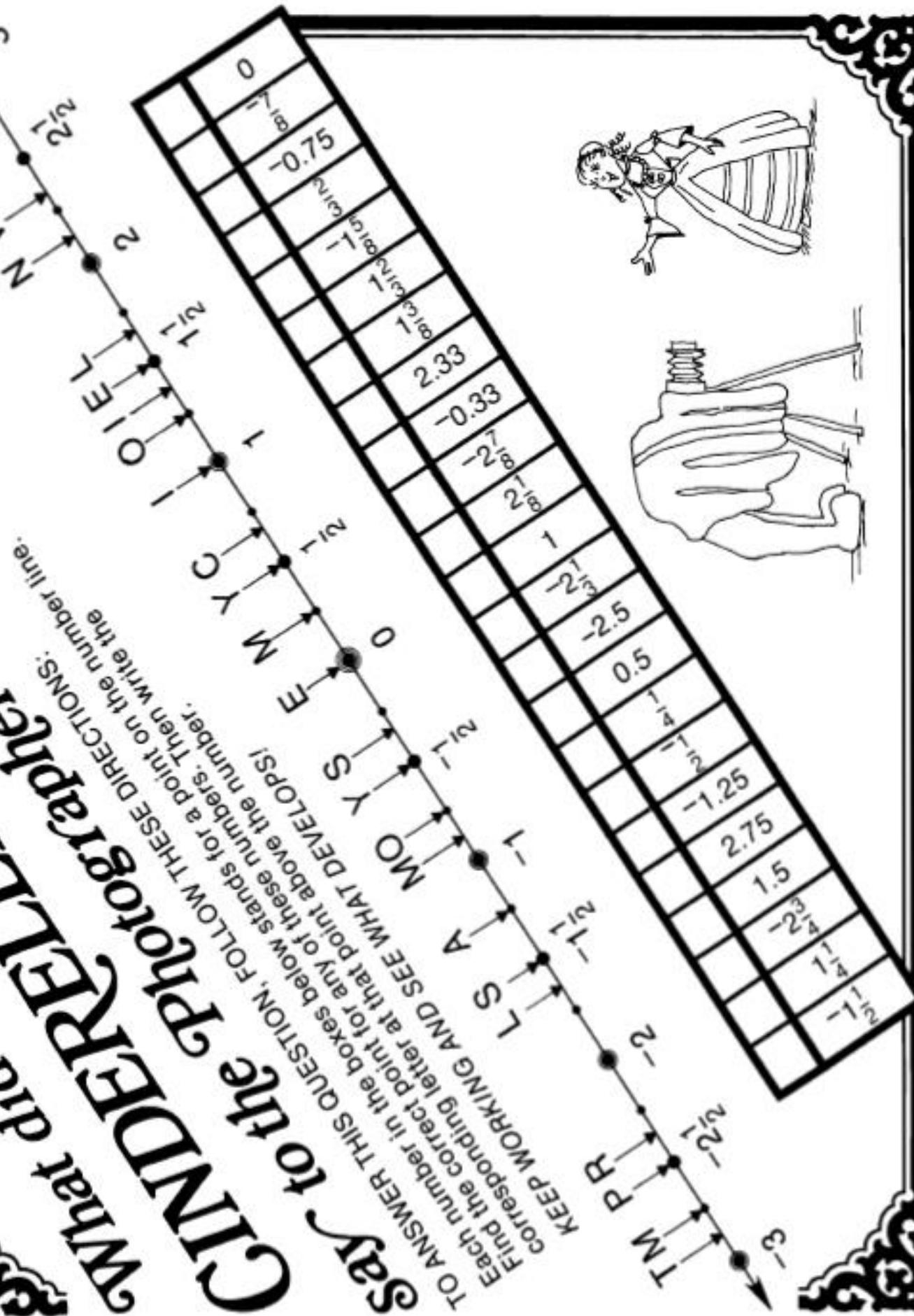


What did GIMDEFFELLA say to the photographer?

TO ANSWER THIS QUESTION, FOLLOW THESE DIRECTIONS:
 Find the correct point for any of these numbers. Then write the corresponding letter at that point above the number.
 KEEP WORKING AND SEE WHAT DEVELOPS!

TO ANSWER THIS QUESTION, FOLLOW THESE DIRECTIONS:
 Find the correct point for any of these numbers. Then write the corresponding letter at that point above the number.
 KEEP WORKING AND SEE WHAT DEVELOPS!



What did GIMDEFFELLA say to the photographer?

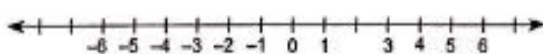
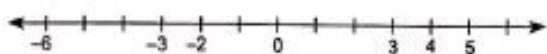
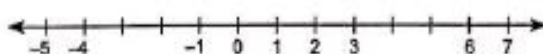
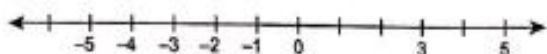
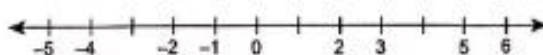
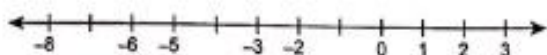

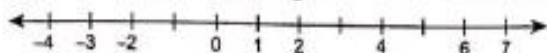
TO ANSWER THIS QUESTION, FOLLOW THESE DIRECTIONS:
 Find the correct point for any of these numbers. Then write the corresponding letter at that point above the number.
 KEEP WORKING AND SEE WHAT DEVELOPS!

TO ANSWER THIS QUESTION, FOLLOW THESE DIRECTIONS:
 Find the correct point for any of these numbers. Then write the corresponding letter at that point above the number.
 KEEP WORKING AND SEE WHAT DEVELOPS!

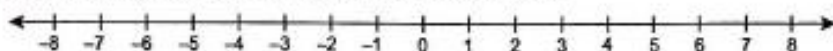
GRAPHING INTEGERS ON A NUMBER LINE

SKILLS

Write in the missing integers of the number line.



List the integers by referring to the number line.



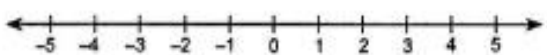
The integers between 0 and 4 are _____. The integers between -1 and -4 are _____.

The integers between 3 and 6 are _____. The integers between -2 and -5 are _____.

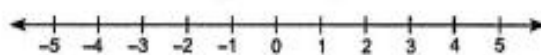
The integers between -5 and -8 are _____. The integers between 5 and 8 are _____.

The integers between -3 and -7 are _____.

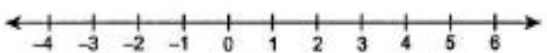
Graph the integers.



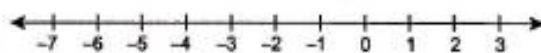
Graph -1 and 3.



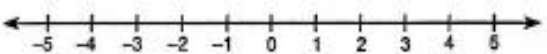
Graph 1 and 4.



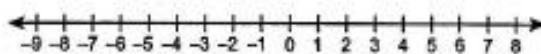
Graph -3 and 5.



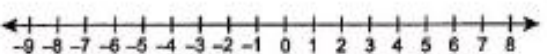
Graph -6 and -2.



Graph -2 and 2.



Graph -7 and 6.



Graph -8 and 7.

PROBLEM SOLVING

Graph each described integer on the number line. What word is spelled?

- | | |
|----------------------------|------------------------|
| E: 20 feet above sea level | A: A loss of 2 dollars |
| T: A profit of 8 dollars | T: Grew 4 inches |
| L: Deposit 15 dollars | E: 8° below zero |
| S: 14 feet below sea level | |



When read from left to right, the letters spell the word "_____."

This Extra Practice worksheet supplements Larson's Prealgebra, a multimedia mathematics program for middle school by Meridian Creative Group. Learn more about Meridian's math tutorial programs, workbooks, and staff development workshops at www.meridiancg.com.

Copyright © Meridian Creative Group. All rights reserved.