

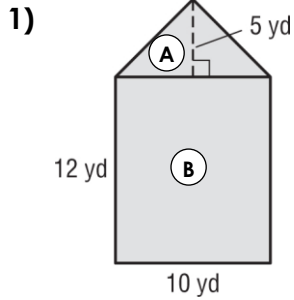
Math 6 - Unit 5: Area & Volume

Composite Area Practice

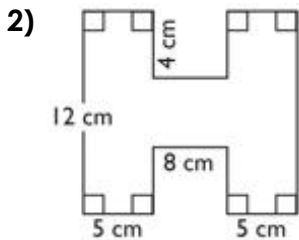
Name: _____

Class Period: 1 2 3 4 Date: _____

Find the area of each figure. Round to the nearest tenth if necessary.

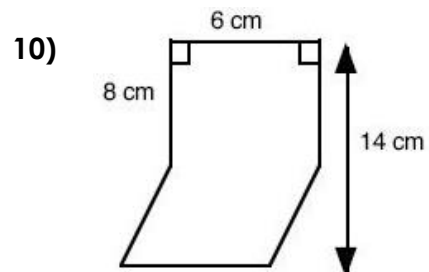
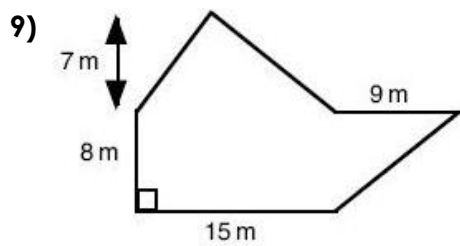
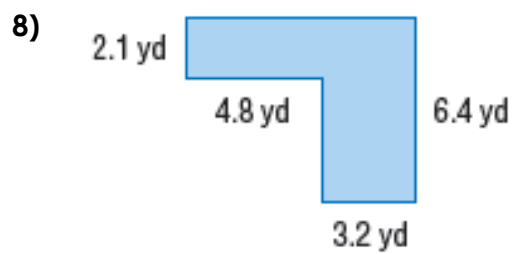
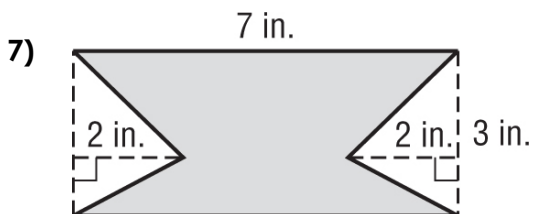
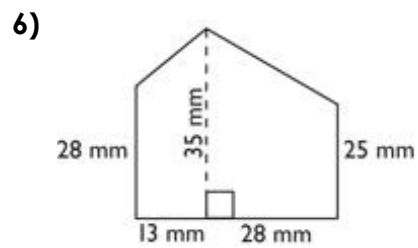
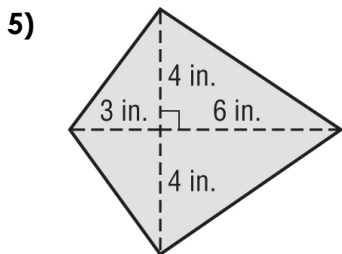
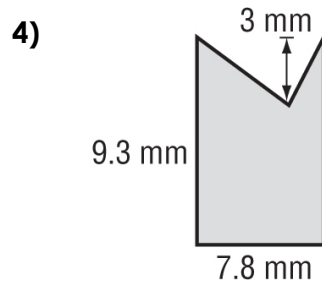
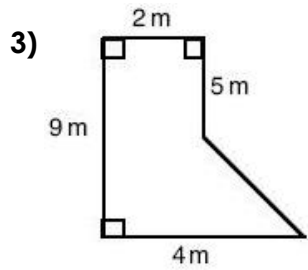


	Area _A	Area _B
Name of Shape		
Formula		
Substitution		
Solution (with Units)		
Total Area (with units):		



Break the figure above into three pieces and label them, A, B & C. Then complete the chart to find the total area.

	Area _A	Area _B	Area _C
Name of Shape			
Formula			
Substitution			
Solution (with Units)			
Total Area (with units):			



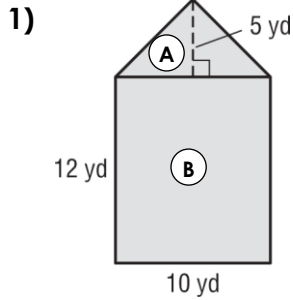
Math 6 - Unit 5: Area & Volume

Composite Area Practice **ANSWER KEY**

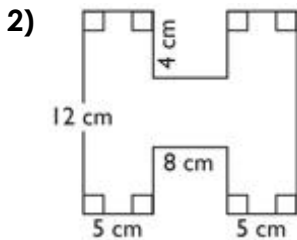
Name: _____

Class Period: 1 2 3 4 Date: _____

Find the area of each figure. Round to the nearest tenth if necessary.



	Area _A	Area _B
Name of Shape		
Formula		
Substitution		
Solution (with Units)		
Total Area (with units):		



Break the figure above into three pieces and label them, A, B & C. Then complete the chart to find the total area.

	Area _A	Area _B	Area _C
Name of Shape			
Formula			
Substitution			
Solution (with Units)			
Total Area (with units):			

