

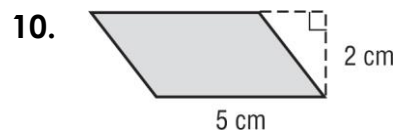
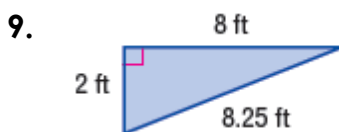
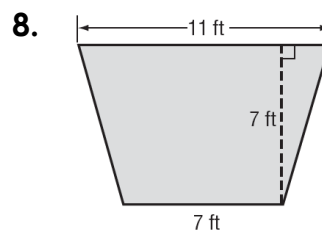
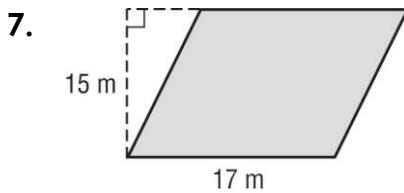
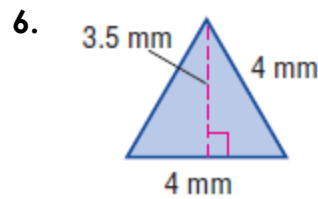
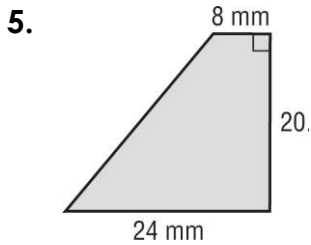
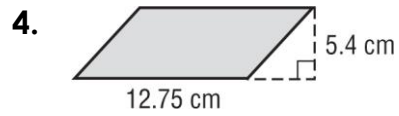
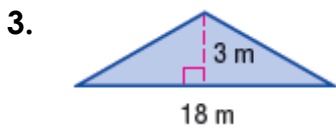
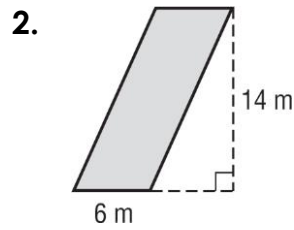
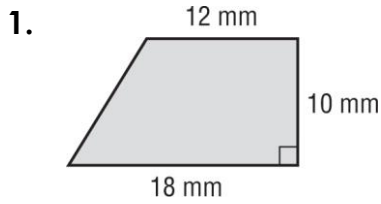
# Math 6 - Unit 5: Area and Volume

Finding Area

Name: \_\_\_\_\_

Class Period: 1 2 3 4 Date: \_\_\_\_\_

Find the area of each figure.



Area

# Math 6 - Unit 5: Area and Volume

Finding Area

Name: \_\_\_\_\_

Class Period: 1 2 3 4 Date: \_\_\_\_\_

Find the area of each figure.

